

# 4.1 Polar Coordinates

A coordinate system represents a point in the plane by an ordered pair of numbers called coordinates. Usually we use Cartesian coordinates, which are directed distances from two perpendicular axes. Here we describe a coordinate system introduced by Newton, called the polar coordinate system, which is more convenient for many purposes.

We choose a point in the plane that is called the **pole** (or origin) and is labeled  $O$ . Then we draw a ray (half-line) starting at  $O$  called the **polar axis**. This axis is usually drawn horizontally to the right and corresponds to the positive x-axis in Cartesian coordinates.

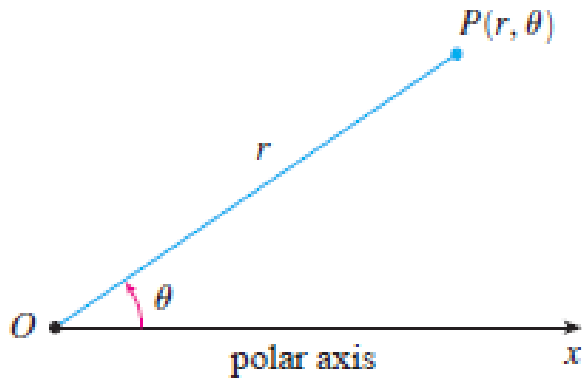


FIGURE 1

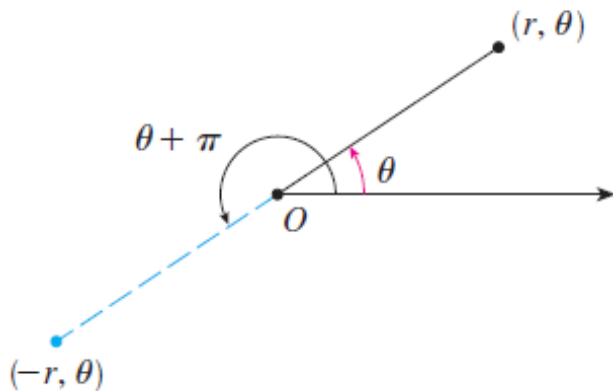


FIGURE 2

If  $P$  is any other point in the plane, let  $r$  be the distance from  $O$  to  $P$  and let  $\theta$  be the angle between the polar axis and the line  $OP$  as in Figure 1. Then the point  $P$  is represented by the ordered pair  $(r, \theta)$  and  $r, \theta$  are called **polar coordinates** of  $P$ . We use the convention that an angle  $r$  is positive if measured in the counterclockwise direction from the polar axis and negative in the clockwise direction. If  $P = O$ , then  $r = 0$  and we agree that  $(0, \theta)$  represents the pole for any value of  $\theta$ .

We extend the meaning of polar coordinates  $(r, \theta)$  to the case in which  $r$  is negative by agreeing that, as in Figure 2, the points  $(-r, \theta)$  and  $(r, \theta)$  lie on the same line through  $O$  and at the same distance  $|r|$  from  $O$ , but on opposite sides of  $O$ .

If ,  $r > 0$  the point  $(r, \theta)$  lies in the same quadrant as  $\theta$ ; if  $r < 0$ , it lies in the quadrant on the opposite side of the pole.

Notice that  $(-r, \theta)$  represents the same point as  $(r, \theta + \pi)$ .

**Example 1** Plot the points whose polar coordinates are given.

$$(a) \left(1, \frac{5\pi}{4}\right), (b) (2, 3\pi), (c) \left(2, -\frac{2\pi}{3}\right), (d) \left(-3, \frac{3\pi}{4}\right)$$

**Solution**

The points are plotted in Figure 3.

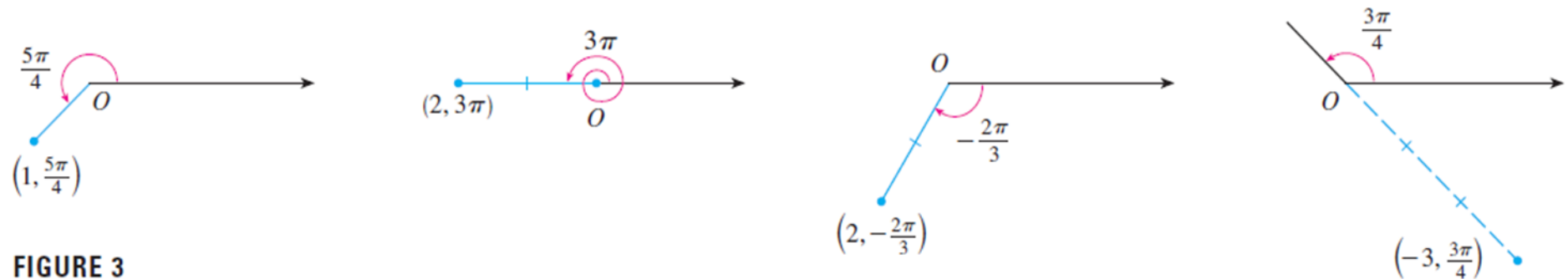


FIGURE 3

In the Cartesian coordinate system every point has only one representation, but in the polar coordinate system each point has many representations. For instance, the point  $\left(1, \frac{5\pi}{4}\right)$  in Example 1(a) can be written as  $\left(1, -\frac{3\pi}{4}\right)$  or  $\left(1, \frac{13\pi}{4}\right)$  or  $\left(-1, \frac{\pi}{4}\right)$

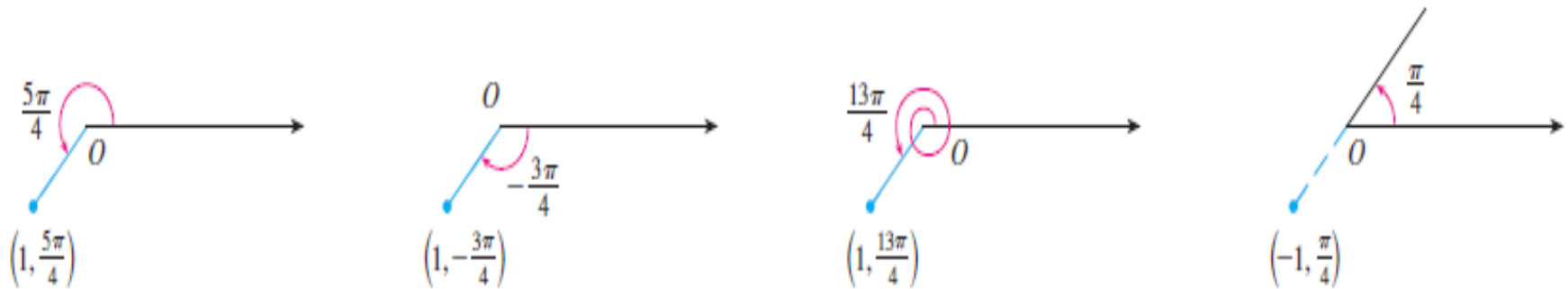


FIGURE 4

In fact, since a complete counterclockwise rotation is given by an angle  $2\pi$ , the point represented by polar coordinates  $(r, \theta)$  is also represented by

$$(r, \theta + 2n\pi) \text{ and } (-r, \theta + (2n + 1)\pi)$$

where  $n$  is any integer.

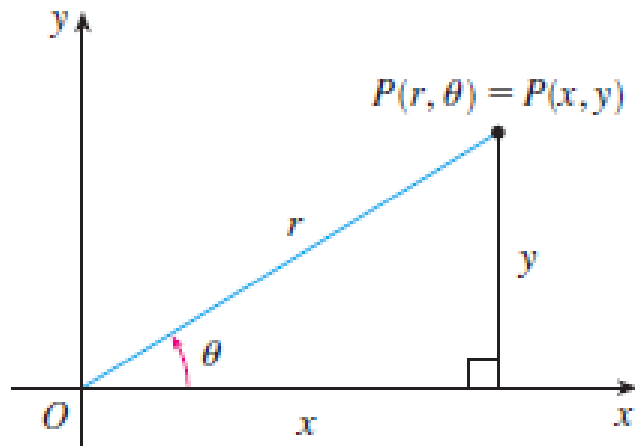


FIGURE 5

The connection between polar and Cartesian coordinates can be seen from Figure 5, in which the pole corresponds to the origin and the polar axis coincides with the positive x-axis. If the point has Cartesian coordinates  $(x, y)$  and polar coordinates  $(r, \theta)$ , then, from the figure, we have

$$x = r \cos \theta, \quad y = r \sin \theta \dots(1)$$

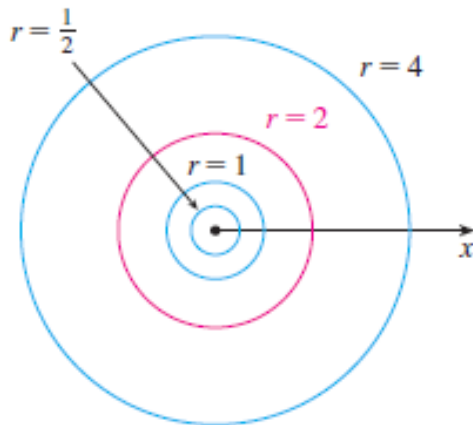
Equations 1 allow us to find the Cartesian coordinates of a point when the polar coordinates are known. To find  $r$  and  $\theta$  when  $x$  and  $y$  are known, we use the equations

$$r^2 = x^2 + y^2, \tan \theta = \frac{y}{x} \dots (2)$$

# Polar Curves

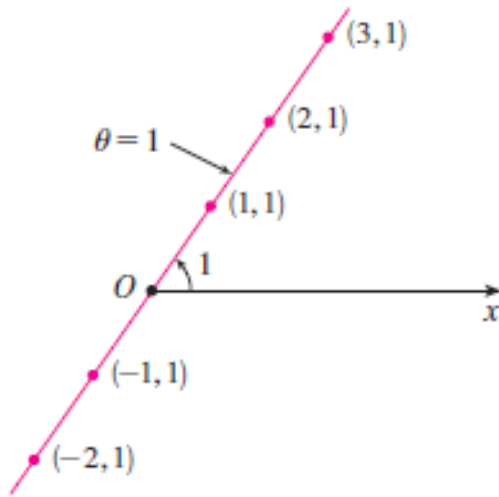
The graph of a polar equation  $r = f(\theta)$ , or more generally,  $F(r, \theta)$  consists of all points  $P$  that have at least one polar representation  $(r, \theta)$  whose coordinates satisfy the equation.

**Example:** What curve is represented by the polar equation  $r = 2$ ?



The curve consists of all points  $(r, \theta)$  with  $r = 2$ . Since  $r$  represents the distance from the point to the pole, the curve  $r = 2$  represents the circle with center  $O$  and radius 2. In general, the equation  $r = a$  represents a circle with center  $O$  and radius  $|a|$ .

**Example:** Sketch the polar curve  $\theta = 1$ .

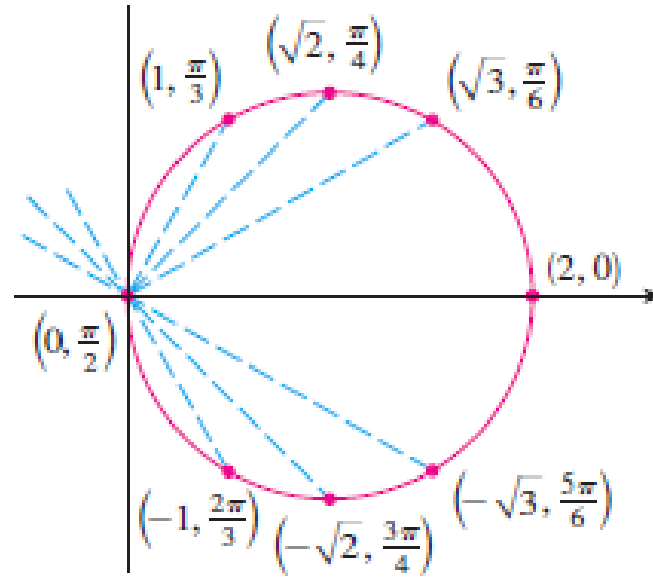


This curve consists of all points  $(r, \theta)$  such that the polar angle  $\theta$  is 1 radian. It is the straight line that passes through  $O$  and makes an angle of 1 radian with the polar axis as in the Figure. Notice that the points  $(r, 1)$  on the line with  $r > 0$  are in the first quadrant, whereas those with  $r < 0$  are in the third quadrant.



**Example:** Sketch the polar curve  $r = 2\cos\theta$ .

$\theta$	$r = 2\cos\theta$
0	2
$\pi/6$	$\sqrt{3}$
$\pi/4$	$\sqrt{2}$
$\pi/3$	1
$\pi/2$	0
$2\pi/3$	-1
$3\pi/4$	$-\sqrt{2}$
$5\pi/6$	$-\sqrt{3}$
$\pi$	-2



We find the values of  $r$  for some convenient values of  $\theta$  and plot the corresponding points  $(r, \theta)$ . Then we join these points to sketch the curve, which appears to be a circle. We have used only values of  $\theta$  between 0 and  $\pi$ , since if we let  $\theta$  increase beyond  $\pi$ , we obtain the same points again.

# Areas and Lengths in Polar Coordinates

In this section we develop the formula for the area of a region whose boundary is given by a polar equation. We need to use the formula for the area of a sector of a circle:

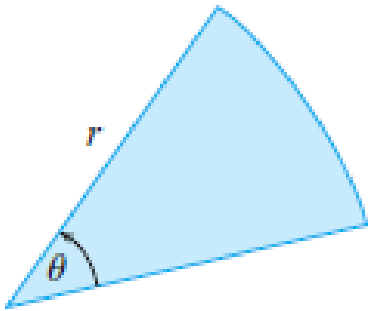
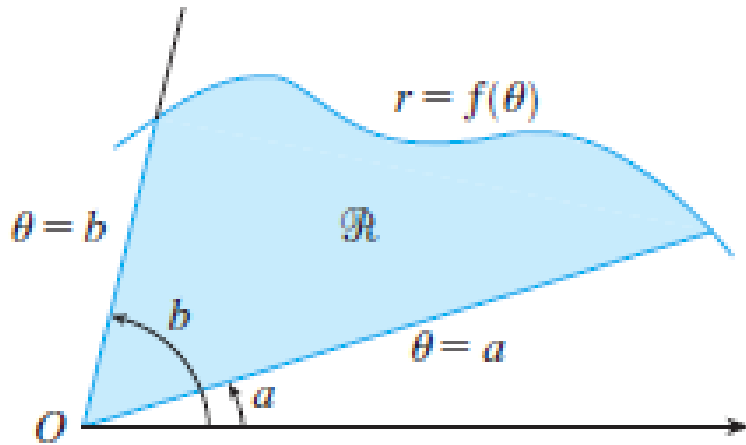


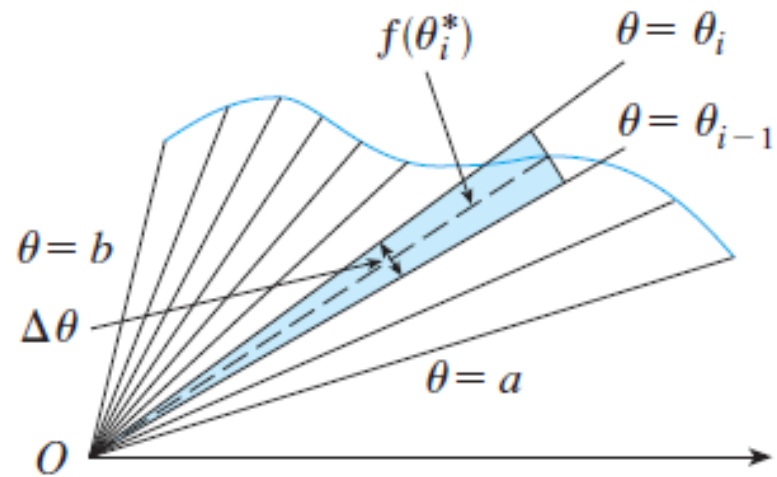
FIGURE 1

$$A = \frac{1}{2}r^2\theta \dots(1)$$

where, as in Fig 1  $r$  is the radius and  $\theta$  is the radian measure of the central angle.

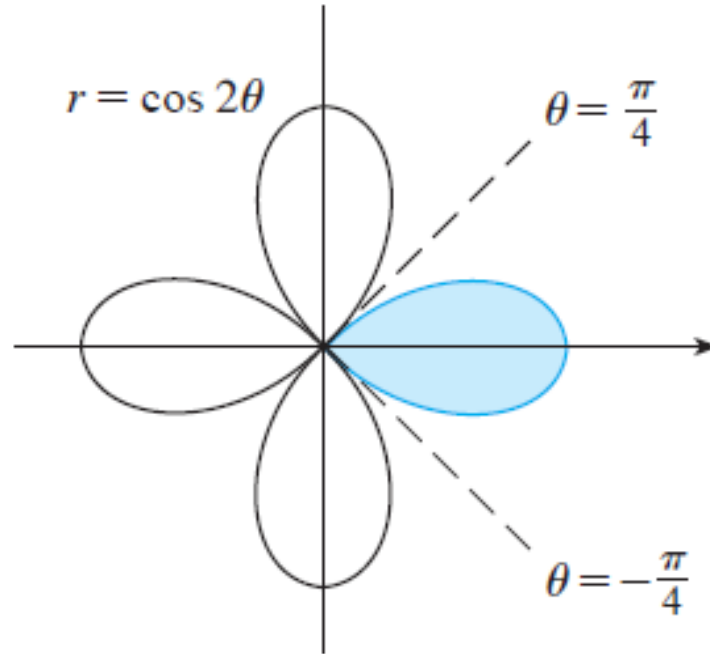


**FIGURE 2**



**FIGURE 3**

**Example-1** Find the area enclosed by one loop of the four-leaved rose  $r = \cos 2\theta$ .



**FIGURE 4**